

SLEGS SYFERS

INGRID DU TOIT

WEEKLIKSE OEFENINGE VIR GRAAD 1


Kwartaal 1	▶	1 – 13
Kwartaal 2	▶▶	14 – 26
Kwartaal 3	▶▶▶	27 – 39
Kwartaal 4	▶▶▶▶	40 – 52

Notas:





- Die antwoorde in die middel van die boek kan verwyder word.
- 'n 100-getalkaart is ingesluit in die middel van die boek voor die antwoorde.
- Gebruik konkrete voorwerpe om te help indien die leerder die somme te moeilik vind.


Gratis werkkaarte by
www.abcmathsandscience.co.za

Kopiereg © 2018. Alle kopiereg word voorbehou. Geen deel van hierdie publikasie mag in enige vorm gereproduseer word nie, tensy skriftelike toestemming van die skrywer daarvoor verkry is.



Omkring die aantal.





















 <p>2 3 4 5</p>	 <p>2 3 4 5</p>
 <p>3 4 5 6</p>	 <p>3 4 5 6</p>



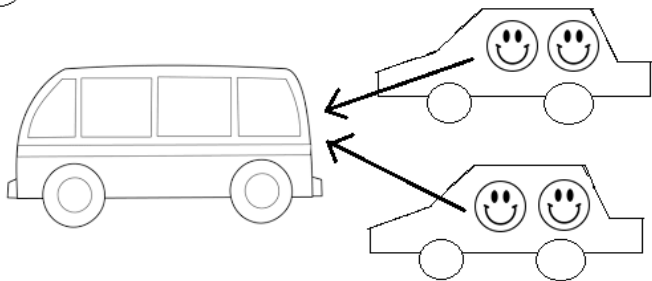
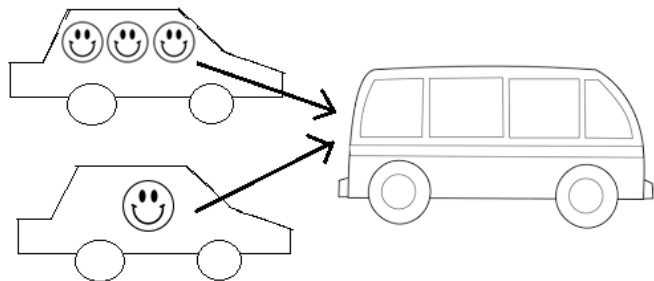
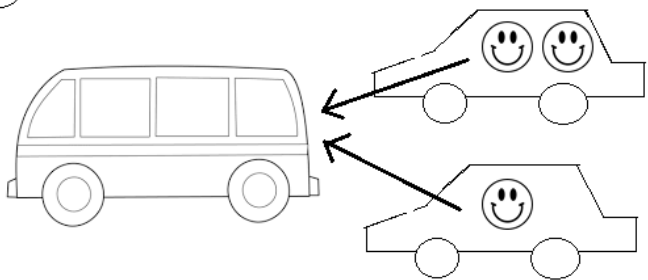
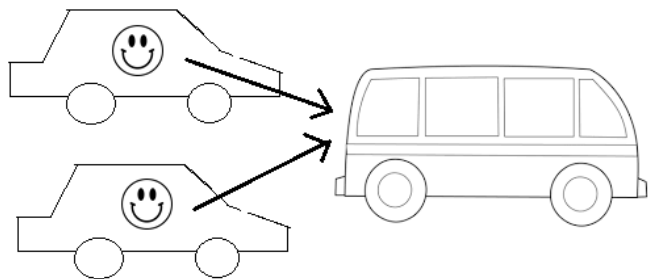
Kleur in volgens die getal.



Tel die vingers en omkring.

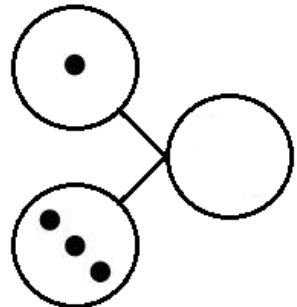
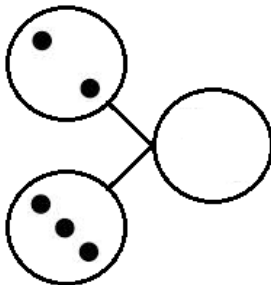
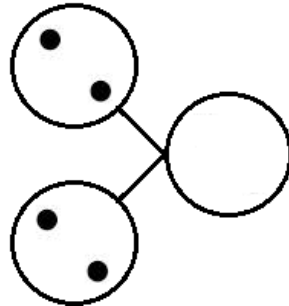
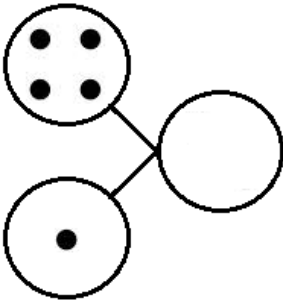
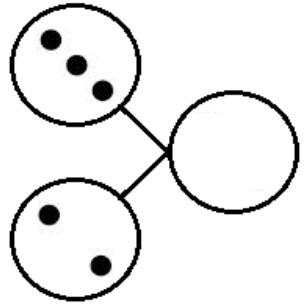
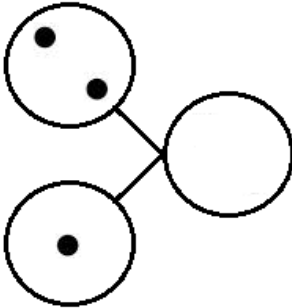
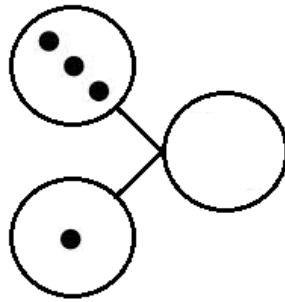
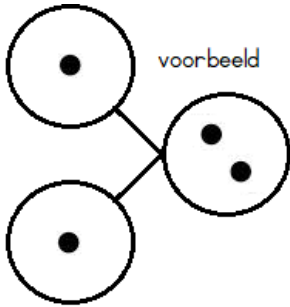
  2 (3) 4 5	  2 3 4 5
  2 3 4 5	  2 3 4 5
  3 4 5 6	  3 4 5 6
  3 4 5 6	  3 4 5 6
  3 4 5 6	  3 4 5 6

Teken die gesiggies oor in die bus.




2 2 2 2 2 2 2 2 2 2

Voeg die kollen saam in een sirkel.



Verdeel die kos gelyk.



Verdeel gelyk.

Teken die gesiggies oor in die motors.

